


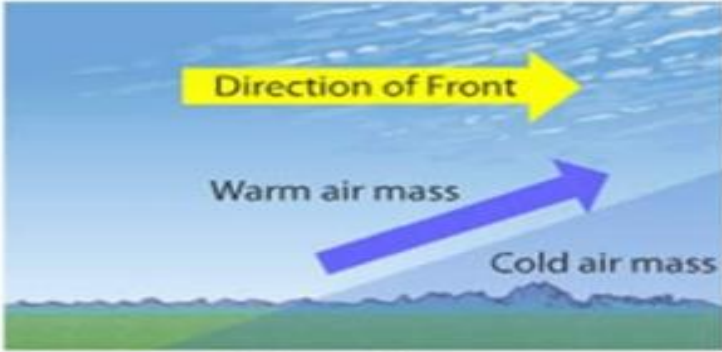
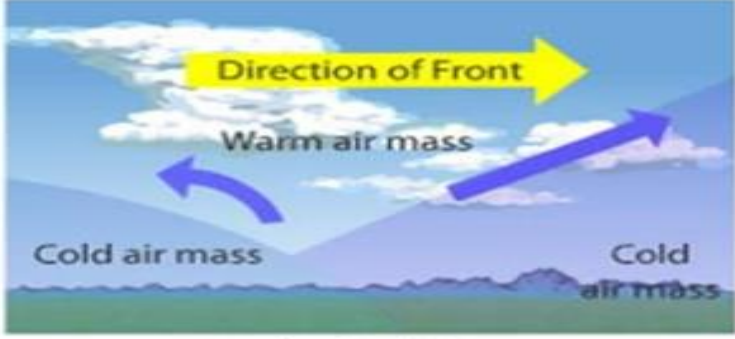
Note: Use your Geography Activity Book to write your answers.

CLIMATE

Resource Interpretation

Use the resource below and your knowledge to answer the questions that follow.

Complete the table by identifying the type of front shown in the resource and draw the symbol of the front as used in the weather map.

| Type of front | Answer |
|--|---|
|  <p>Source: https://www.google.com</p> | <p>Name of front _____</p> <p>Symbol used in weather map _____</p> <p>(2 marks)</p> |
|  <p>Source: https://www.google.com</p> | <p>Name of front _____</p> <p>Symbol used in weather map _____</p> <p>(2 marks)</p> |
|  <p>Source: https://www.google.com</p> | <p>Name of front _____</p> <p>Symbol used in weather map _____</p> <p>(2 marks)</p> |